



Illuminating Global Education Through Indianic Values

# NEW STANDARD GROUP OF INSTITUTES



**HOME  
ASSIGNMENT  
2025**

Name.....

Class.....**7**.....Sec. ....

Branch.....

**Note: 1- All the written work is to be done in the fair note book.**

**2- Prepare in all subject taught topics for test just on reopening of the school.**

**हिन्दी—**

1. किसी पारिवारिक उत्सव का वर्णन अपने शब्दों में अधिकतम 10 पंक्तियों में लिखिए। (व्याकरण नोटबुक पर)
2. अपने क्षेत्र में बढ़ते अपराधों की समस्या के बारे में बताते हुए थानाध्यक्ष को पत्र लिखिए। (व्याकरण नोटबुक पर)
3. संज्ञा और सर्वनाम के भेदों की परिभाषा उदाहरण सहित कंठस्थ कीजिए।

**ENGLISH-**

- 1- Write one page cursive writing daily in your cursive writing book.
- 2- Write a formal letter no.I, on page 83 from Lesson 9, in your Writing Skill Book.
- 3- Write the answer of the questions of comprehension passage no.III, on pages 17 to 19 lesson-1, in your Writing Skill Book.
- 4- Sort out Noun, Pronoun, Verb, Adjective words and their kinds from lesson 2, page no. 23 & 24 from your reader book and write them in your Grammar notebook.





**MATHS-**

**CASE STUDY**

- 1- The teacher tells the class that the lowest marks obtained by a student in his class is half the highest marks plus 5. The lowest score is 45.

**Based on above information give the answer.**

- (i) Find the marks which is 20 more than the lowest:  
(a) 25                      (b) 65                      (c) 70                      (d) None of these
- (ii) Just to pass in the examination border line marks is just 12 less than the lowest marks obtained by the student in the class. Write the required passing marks.  
(a) 56                      (b) 40                      (c) 33                      (d) None of these
- (iii) If one student Aavya of another class who scored 9 marks more than the doubled of lowest marks of this class, find the Aavya's marks:  
(a) 92                      (b) 50                      (c) 89                      (d) None of these
- (iv) Find the highest marks.

- 2- Pointing to a photograph of a boy Mr.Ram said, "He is the son of the only son of my mother." How is Mr Ram related to that boy?  
(A) Brother (B) Uncle (C) Cousin (D) Father
- 3- Rita told Mani, "The girl I met yesterday at the beach was the youngest daughter of the brother-in-law of my friend's mother." How is the girl related to Rita's friend?  
(1) Cousin (2) Daughter (3) Friend (4) Aunt
- 4- Ravi is a son of Aman's father's sister. Sahil is the son of Divya who is the mother of Gaurav and grandmother of Aman. Ashok is the father of Tanya and grandfather of Ravi. Divya is the wife of Ashok.  
How is Ravi related to Divya?  
(1) Nephew (2) Son (3) Grandson (4) Data inadequate
- 5- Which of the following diagrams indicates the best relation between Travelers, Train and Bus ?  
(1)  (2)  (3)  (4) 
- 6- Find the number of triangles in the given figure.  
(1) 8 (2) 10  
(3) 12 (4) 14
- 7- Find the minimum number of straight lines required to make the given figure.  
(1) 16 (2) 17  
(3) 18 (4) 19
- 8-  $a = -8$  ,  $b = -7$  ,  $c = 6$  , verify that  $(a+b) + c = a + (b+c)$ .
- 9- The sum of two integers is 65. If one of them is  $-31$  , find the other.
- 10- In a class test containing 10 questions , 5 marks are awarded for every correct answer and (-2) marks are awarded for every incorrect answer and 0 for each question not attempted.  
(a) Ravi gets 4 correct and 6 incorrect answer. What is his score?  
(b) Reenu gets 5 correct answer and 5 incorrect answer, what is her score?

- 11- A film show lasted for  $\frac{11}{3}$  hours. Out of this time  $\frac{3}{2}$  hours was spent on advertisement. What was the actual duration of the film?
- 12- What should be added to  $\frac{109}{15}$  to get  $\frac{42}{5}$  ?
- 13- A Tin contains 18 kg ghee. After consuming  $\frac{2}{3}$  of it , how much ghee is left in the tin?
- 14- A taxi driver charges ₹ 9.80 per km .How much will he charge for a journey of 106.5 km?
- 15- The product of two rational numbers is  $-\frac{8}{9}$ .If one of the numbers is  $-\frac{4}{15}$ , find the other.

## **SCIENCE**

- 1- Sara, Jai ,Riyan and Akshita are on adventurous camping trip .They have set up a campfire to keep themselves warm as the evening gets chilly. They decided to roast marshmallows on a stick .Sara was roasting the marshmallows. After some time, Sara felt that the stick had become hot . The four friends happily munched on the roasted marshmallows and enjoy the cozy environment created by the campfire.
  - (a) How did the stick become hot?
  - (b) Which process of heat transfer comes into play when the air near the campfire becomes warm and rises while cooler air replaces it ?
  - (c) How did they feel the heat of campfire?
- 2- Write five examples of physical and chemical changes while helping your mother in kitchen.
- 3- To keep her soup warm Paheli wrapped the container in which it was kept with a woolen cloth. Can she apply the same method to keep a glass of cold drink cool? Give reason for your answer.

**NOTE -All the work to be done in Chemistry note book.**

## **SOCIAL SCIENCE-**

- 1- Make a family tree starting your grandparents and write one special incident that happened with them during their childhood.
- 2- To practice map work of chapter- 4 to 7 in map book. (page no. 09-15)

## **COMPUTER-**

- 1- Imagine you are a cyber security expert. What advice would you give to your classmates to protect their online activities.
- 2- List and explain 5 ways in which technology can help the environment.
- 3- Imagine a world where computers suddenly disappear. What would change in your life, school and the world?

## **संस्कृत—**

1. अपनी पाठ्य पुस्तक से कोई चार श्लोक याद कीजिए ।
2. अपना स्वपरिचय संस्कृत भाषा में 10 वाक्यों में रफ कॉपी में लिखिए ।
3. लता शब्द का रूप रफ कॉपी में लिखकर याद कीजिए ।

## Our Institutes

- ⇒ **NEW STANDARD PUBLIC SCHOOL SENIOR SECONDARY SCHOOL**  
Tripula, Raebareli
- ⇒ **NEW STANDARD BALIKA VIDYA MANDIR**  
Semri Kothi, Super Market, Raebareli
- ⇒ **NEW STANDARD PUBLIC SCHOOL INTERMEDIATE COLLEGE**  
Baba Devadas Ashram, Salethu, Maharjagnj, Raebareli
- ⇒ **NEW STANDARD PUBLIC SCHOOL, SENIOR SECONDARY SCHOOL**  
Bagha, Salon, Raebareli
- ⇒ **NEW STANDARD PUBLIC SCHOOL, SENIOR SECONDARY SCHOOL**  
Surendra Saraswati Nagar, Lalganj, Raebareli
- ⇒ **RKD NEW STANDARD PUBLIC SCHOOL SENIOR SECONDARY SCHOOL**  
Tejgaon, Raebareli
- ⇒ **INDRANI DEVI NEW STANDARD PUBLIC SCHOOL**  
Krishnapur Tala, Raebareli
- ⇒ **NEW STANDARD COLLEGE OF HIGHER EDUCATION**  
Salethu, Maharajganj, Raebareli
- ⇒ **NEW STANDARD ACADEMY**  
Super Market, Raebareli

***Note: Admission open for B.A. and B.Sc. for 2025-26***